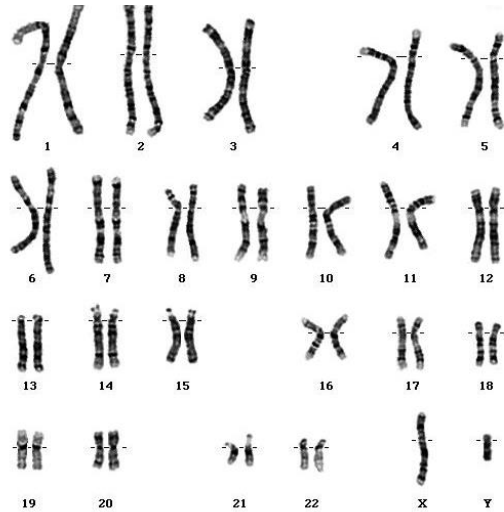


Karyotype Review

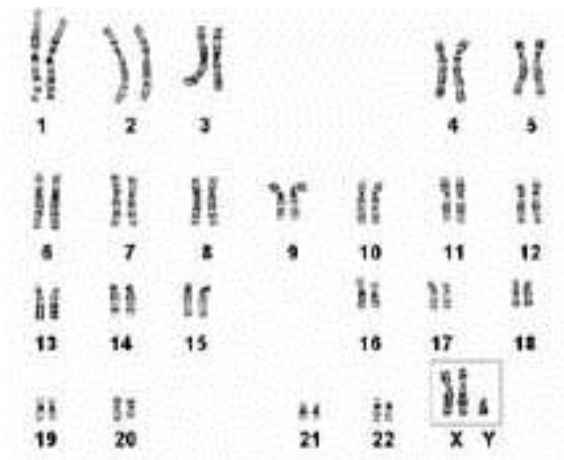
Karyotype = _____

Label the following pictures as *normal* or *abnormal*, *male* or *female*, **AND** *haploid* or *diploid*

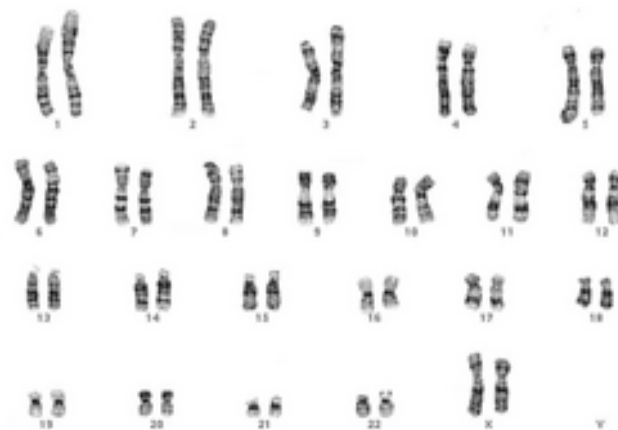
1. Sex = _____ Haploid or Diploid = _____ Normal or Abnormal = _____



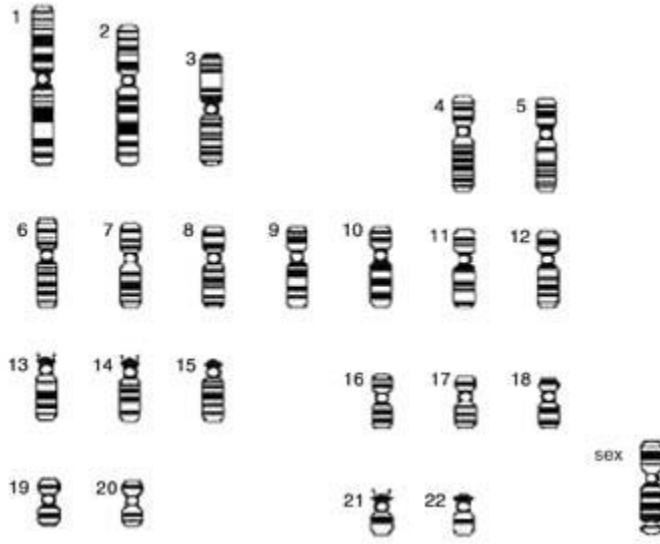
2. Sex = _____ Haploid or Diploid = _____ Normal or Abnormal = _____



3. Sex = _____ Haploid or Diploid = _____ Normal or Abnormal = _____



4. Sex = _____ Haploid or Diploid = _____ Normal or Abnormal = _____



On karyotype #5, label and DEFINE the following parts:

- *Chromatid* =
- *Centromere* =
- *Chromosome* =
- *Autosomes* =
- *Sex chromosomes* =
- *Homologous chromosomes* =

5. Sex = _____ Haploid or Diploid = _____ Normal or Abnormal = _____

