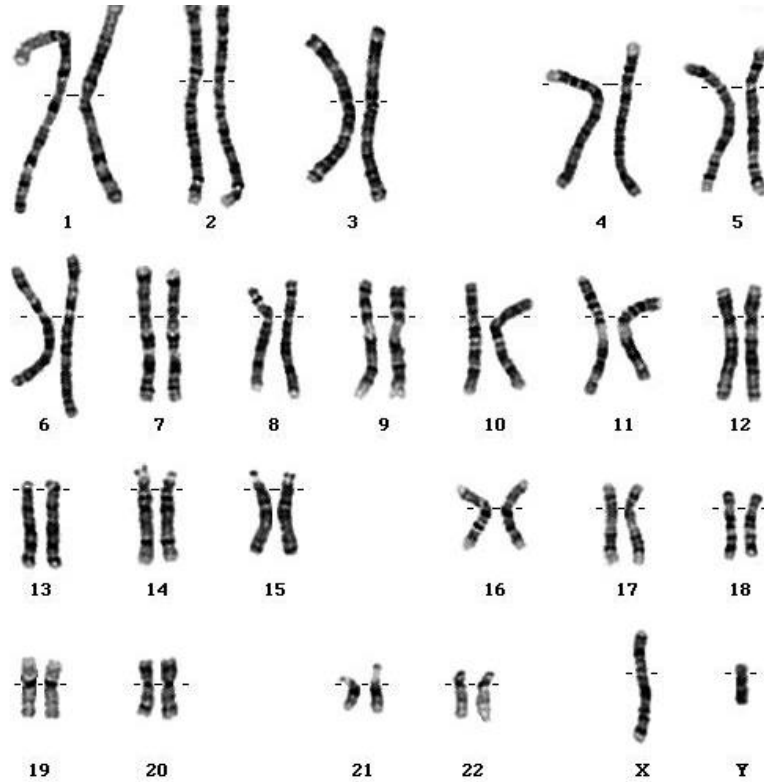


## Karyotype Review

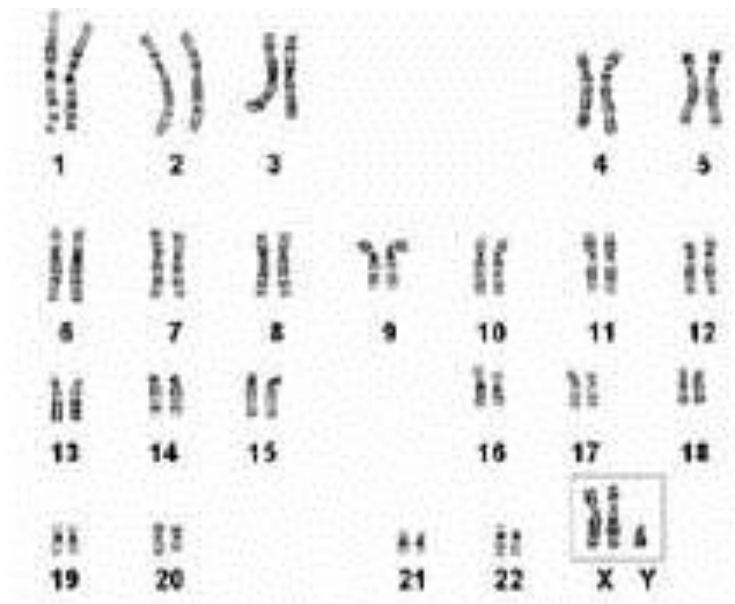
Karyotype = \_\_\_\_\_

Label the following pictures as *normal or abnormal, male or female, AND haploid or diploid*

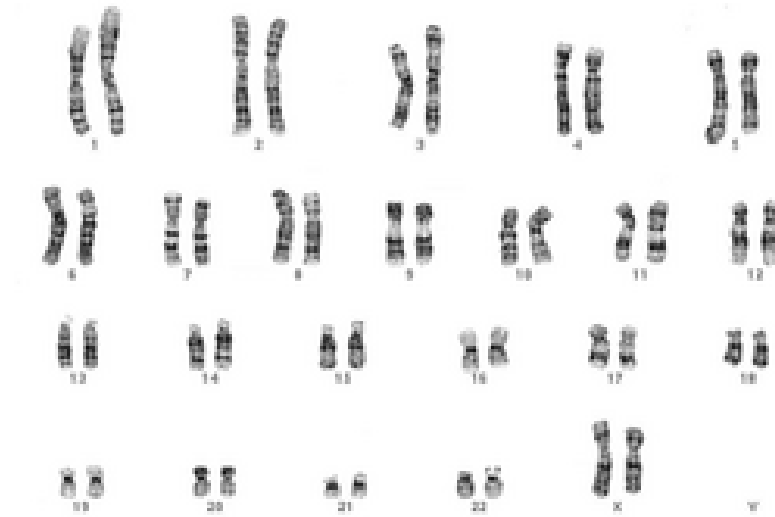
1. Sex = \_\_\_\_\_ Haploid or Diploid = \_\_\_\_\_ Normal or Abnormal = \_\_\_\_\_



2. Sex = \_\_\_\_\_ Haploid or Diploid = \_\_\_\_\_ Normal or Abnormal = \_\_\_\_\_



3. Sex = \_\_\_\_\_ Haploid or Diploid = \_\_\_\_\_ Normal or Abnormal = \_\_\_\_\_



**On karyotype #4, label and DEFINE the following parts:** *chromatid, centromere, chromosome, autosomes, sex chromosomes, and homologous chromosomes*

4. Sex = \_\_\_\_\_ Haploid or Diploid = \_\_\_\_\_ Normal or Abnormal = \_\_\_\_\_

